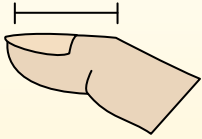
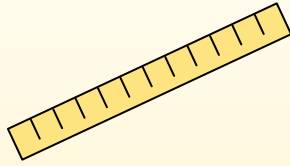


**Determine which letter best represents the length / height.****Answers****Inch (in)**

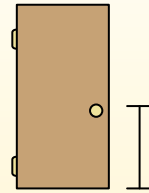
An inch is about the distance of the last joint of your finger.

**Foot (ft)**

A foot is 12 inches. The length of a ruler.

**Yard (yd)**

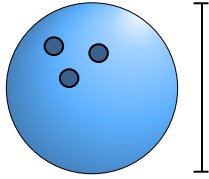
1 yard is the same as 3 feet. From the floor to a door knob is about 1 yard.

**Mile (mi)**

A mile is 5,280 feet. Most major roads are at least a mile long.

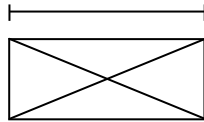


1)

**Bowling Ball Height**


- A. 4 inches
- B. 10 inches
- C. 10 feet
- D. 1 yard

2)

**Envelope**

- A. 3 inches
- B. 1 inch
- C. 7 inches
- D. 1 foot

3)

**Car**

- A. 5 feet
- B. 5 yards
- C. 8 inches
- D. 3 feet

4)

**2 Liter of Soda**


- A. 1 inch
- B. 1 mile
- C. 6 Yards
- D. 1 foot

5)

**Dresser**

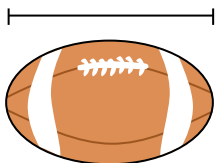
- A. 12 inches
- B. 3 feet
- C. 18 inches
- D. 3 Yards

6)

**Shovel**

- A. 11 inches
- B. 3 yards
- C. 4 feet
- D. 2 feet

7)

**Football**

- A. 2 feet
- B. 1 yard
- C. 11 inches
- D. 1 inch

8)

**Pencil**

- A. 1 inch
- B. 7 inches
- C. 1 foot
- D. 1 yard

9)

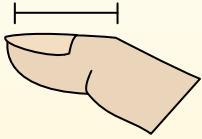
**Dog**

- A. 4 yards
- B. 4 inches
- C. 2 feet
- D. 2 yards

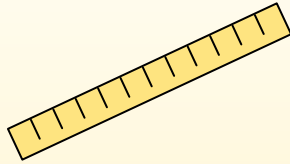
1. _____
2. _____
3. _____
4. _____
5. _____
6. _____
7. _____
8. _____
9. _____

**Determine which letter best represents the length / height.****Inch (in)**

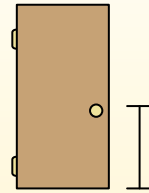
An inch is about the distance of the last joint of your finger.

**Foot (ft)**

A foot is 12 inches. The length of a ruler.

**Yard (yd)**

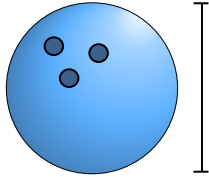
1 yard is the same as 3 feet. From the floor to a door knob is about 1 yard.

**Mile (mi)**

A mile is 5,280 feet. Most major roads are at least a mile long.

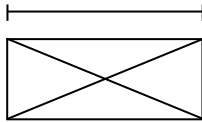


1)

**Bowling Ball Height**


- A. 4 inches
- B. 10 inches
- C. 10 feet
- D. 1 yard

2)

**Envelope**

- A. 3 inches
- B. 1 inch
- C. 7 inches
- D. 1 foot

3)

**Car**

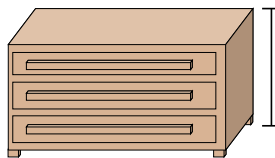
- A. 5 feet
- B. 5 yards
- C. 8 inches
- D. 3 feet

4)

**2 Liter of Soda**

- A. 1 inch
- B. 1 mile
- C. 6 Yards
- D. 1 foot

5)

**Dresser**

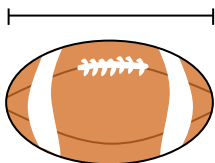
- A. 12 inches
- B. 3 feet
- C. 18 inches
- D. 3 Yards

6)

**Shovel**

- A. 11 inches
- B. 3 yards
- C. 4 feet
- D. 2 feet

7)

**Football**

- A. 2 feet
- B. 1 yard
- C. 11 inches
- D. 1 inch

8)

**Pencil**

- A. 1 inch
- B. 7 inches
- C. 1 foot
- D. 1 yard

9)

**Dog**

- A. 4 yards
- B. 4 inches
- C. 2 feet
- D. 2 yards

Answers

- 1. **B**
- 2. **C**
- 3. **A**
- 4. **D**
- 5. **B**
- 6. **C**
- 7. **C**
- 8. **B**
- 9. **C**